

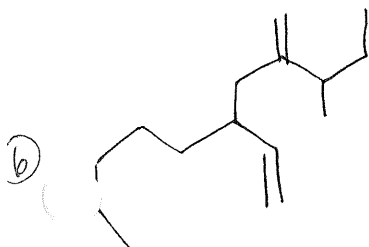
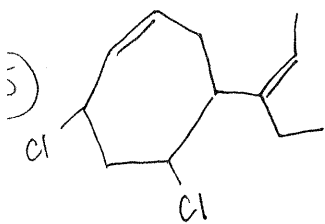
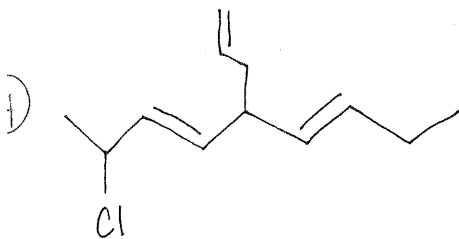
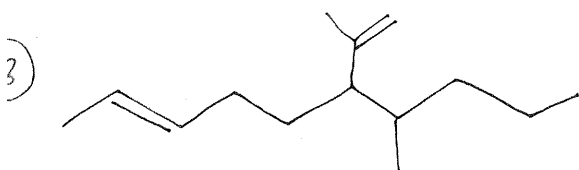
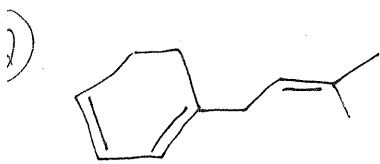
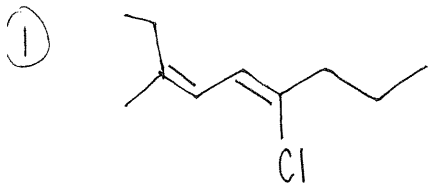
Mrs. Bonanno  
O-chem

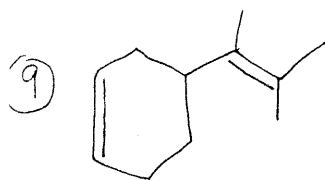
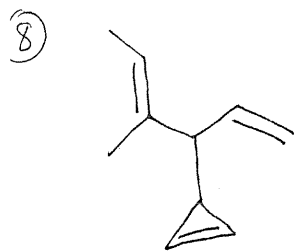
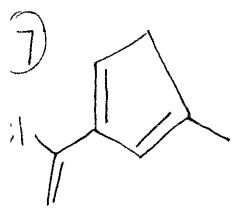
Name:

Date:

Pd:

Name the following alkenes:





Draw Structures for the following:

1) (2Z, 4Z)-octa-2,4-diene

2) (1E, 4Z)-1,3-dichloro-5-cyclopropyl-1,4-pentadiene

3) 2-chloro-5-(1-methyl-2-propenyl)-6-vinyl cyclohexa-1,3-diene